



CADET COLLEGE FAISALABAD
INTELLIGENCE TEST

Time: 1 HOUR

Total Marks: 100

Passing Marks: 60

INSTRUCTIONS

- Don't write anything on the question book
- Fill in all the fields (Name, Roll Number, Class) on OMR Sheet before start of paper
- There is no negative marking
- Each questions carries two marks
- Use black or blue ball point pens, and avoid gel pens and fountain pens for filling the sheets.
- Darken the bubbles completely. Don't put a tick mark or a cross mark.
- Do not use pencils to mark your answers.
- Use of whiteners to rectify filling errors is not allowed.
- Calculator is not allowed.

CADET COLLEGE FAISALABAD

INTELLIGENCE TEST

Q No 1. Foot is to walk as nose is to?

- A. Eat
- B. Smell
- C. Sight
- D. Touch

Q No 2. Able: Ability:: equal: ?

- A. Equalance
- B. Equality
- C. Similarity
- D. Accuracy

Q No 3. As green as grass : As cunning as?

- A. Lion
- B. Fox
- C. Bear
- D. Dog

Q No 4. If FACE is coded as 6135 then ACE is Coded as _____.

- A. 357
- B. 657
- C. 135
- D. 176

Q No 5. If A=2, B=4, C=6 and so on then what word will the following number stand for?

8 10 10 32

- A. DEEP
- B. PEEP
- C. EPED
- D. EPPE

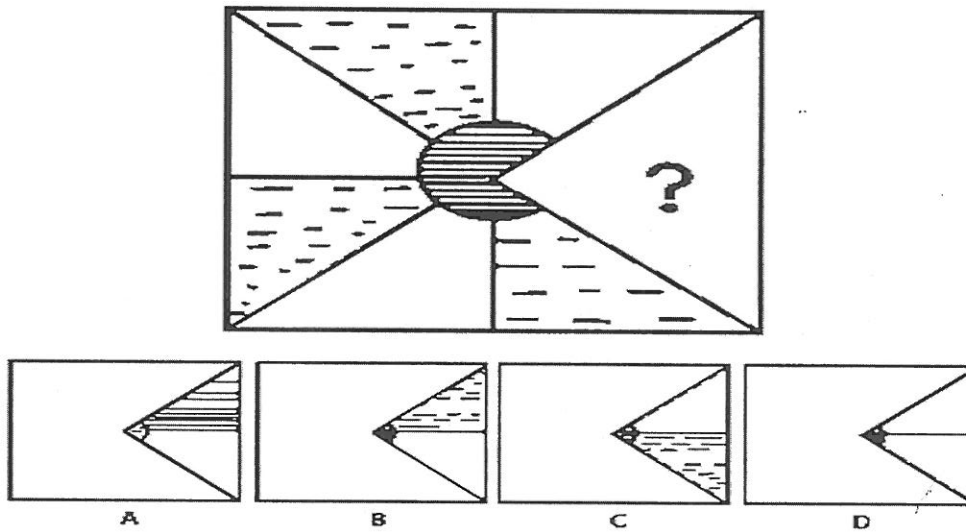
Q No 6. Which one is different from the rest?

- A. DG
- B. IL
- C. QS
- D. MP

Q No 7. Which one is different from the rest?

- A. September
- B. May
- C. March
- D. Tuesday

Q No 8. Choose the correct option to complete the following pattern.



Q No 9. If add is to addition then admit is to

- A. Admiration
- B. Admission
- C. Agreement
- D. Allotment

Q No 10. Day is to night then morning is to

- A. Light
- B. Evening
- C. Darkness
- D. Brightness

Q No 11. Which number does not belong to the series?

- A. 3
- B. 6
- C. 10
- D. 12

Q No 12. Pick the odd one out

- A. Lips
- B. Eyes
- C. Chest
- D. Ear

Q No 13. What number comes next in the series 3, 6, 12, 24,.....

- A. 44
- B. 46
- C. 48
- D. 34

Q No 14. Which one is different from the others?

- A. Missing
- B. Away
- C. Absent
- D. Crime

Q No 15. We travel by aeroplane because:

- A. It can fly high overseas
- B. It is quicker
- C. It provides comfortable journey
- D. It is luxurious

Q No 16. "Far" means the opposite of

- A. Near
- B. Road
- C. Distance
- D. Close

Q No 17. Which group of letters is different from the others?

- A. ACE
- B. FHJ
- C. KLM
- D. NPR

Q No 18. It takes two minutes to boil an EGG. How much time will it take to boil 5 EGGS all together?

- A. 2
- B. 10
- C. 15
- D. 30

Q No 19. An electric train is running from east to west with speed 80 KM / H, in what direction will the smoke go?

- A. East to West
- B. West to East
- C. South to West
- D. None of these

Q No 20. If shoe is to foot then helmet is to

- A. Steel
- B. Head
- C. Motorcycle
- D. Combat


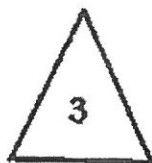

Q No 21. What will come next in the following series A C F _____

- A. J
- B. H
- C. K
- D. I

Q No 22. If FELLOW is coded as 465531 then OWL is coded as

- A. 315
- B. 135
- C. 351
- D. 153

Q No 23. What will come next?

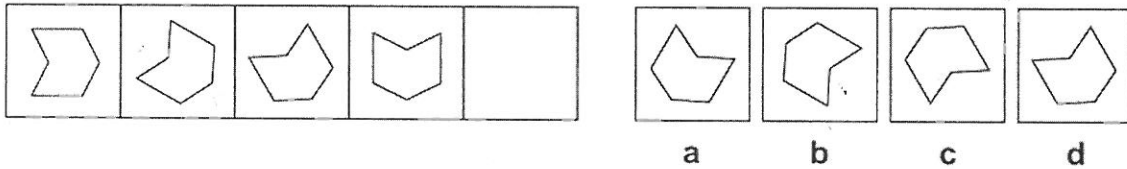


- A. 1
- B. 5
- C. 0
- D. 360

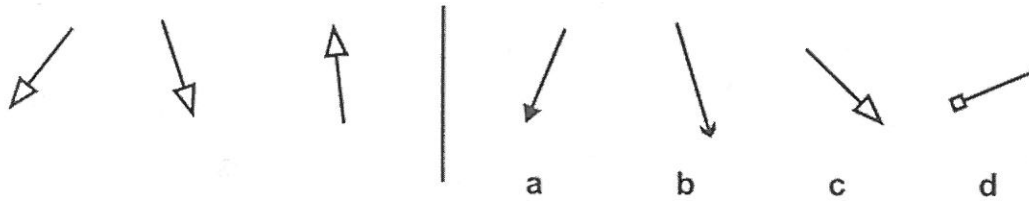
Q No 24. Girl : Woman as

- A. Student : Teachers
- B. Black : White
- C. Infant : Child
- D. Bright : Genine

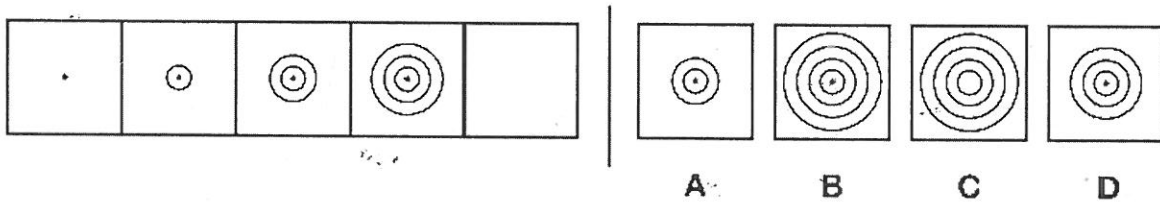
Q No 25. Find which one of the squares on the right should go in place of the empty square.



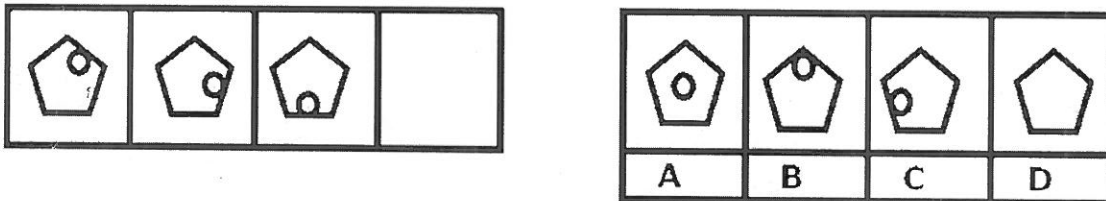
Q No 26. Find which of the figures on the right is most like the three figures on the left.



Q No 27. Which one of the squares on the right should take the place of the empty square?



Q No 28. Which one of the figures in the boxes on the right is the missing figure?



Q No 29. Which one is heavier, a pound of feather or a pound of gold?

- A. Feather
- B. Neither
- C. Gold
- D. Iron

Q No 30. Cars have mirrors because _____.

- A. To see the cars which are ahead
- B. To see other people in the car
- C. To see different sights
- D. To see the car coming from behind

Q No 31. Which one is different from the rest?

- A. Carrot
- B. Mango
- C. Orange
- D. Melon

Q No 32. Three is to thrice as two is to

- A. Double
- B. Pair
- C. Twice
- D. Two times

Q No 33. Pakistan is to Asia as United Kingdom is to _____.

- A. Europe
- B. Africa
- C. America
- D. England

Q No 34. The opposite of Never is _____.

- A. Always
- B. Seldom
- C. Often
- D. Frequently

Q No 35. Insert the correct figure.

9 5 8 5 7 5 _____

- A. 6
- B. 5
- C. 7
- D. 8

Q No 36. 'N' is to 'P', as 'S' is to _____?

- A. U
- B. T
- C. V
- D. R

Q No 37. If a man writes 5 papers in 5 minutes, he will write 1 paper in?

- A. 1 minute
- B. 2 minutes
- C. 5 minutes
- D. 2. minutes

Q No 38. $2 + 2 \div 2 = ?$

- A. 1
- B. 2
- C. 3
- D. 4

Q No 39. A man walked towards north and turned left. After some time, he turned right. What will be his present direction?

- A. North
- B. East
- C. West
- D. South

Q No 40. Speed of the train is twice as that of a car. If the car covers 60 km in one hour then how much distance will the train cover in 30 minutes?

- A. 10
- B. 20
- C. 40
- D. 60

Q No 41. Ali starts travelling towards north and after some time he turns left and takes a left turn again. What will be his direction?

- A. North
- B. East
- C. West
- D. South

Q No. 42. In a class of 60 male and 35 female students, 80% of the class failed in Chemistry while 30% in English then which one is true?

- A. Only male have failed.
- B. No male has failed.
- C. Both male and female students have failed

Q No 43. What will come next BDFH JLNP _____ ?

- A. QRST
- B. UVWX
- C. GHIJ
- D. RTVX

Q No 44. If BOX is to 3 then BOXER is to

- A. 5
- B. 4
- C. 7
- D. 8

Q No 45. What will come next?

$$7 + 2 - 1 = H$$

$$22 + 6 - 5 = W$$

$$11 + 6 - 2 = ?$$

- A. O
- B. N
- C. P
- D. M

Q No 46. Which figure is odd one out?

4 8 10 16

- A. 4
- B. 8
- C. 10
- D. 16

Q No 47. Don't think there are no crocodiles _____ the water is calm.

- A. As
- B. Although
- C. Therefore
- D. Because

Q No 48. Oil is mostly _____ by oil tankers in Pakistan.

- A. Wasted
- B. Transported
- C. Found
- D. Split

Q No 49. Bus _____ are going to increase.

- A. Fares
- B. Fee
- C. Rates
- D. Tickets

Q No 50. What is 90% of 90 ?

- A. 61
- B. 71
- C. 81
- D. 100

WELLDONE! THIS IS THE END OF YOUR PAPER. RE-CHECK YOUR ANSWERS IF TIME PERMITS.